

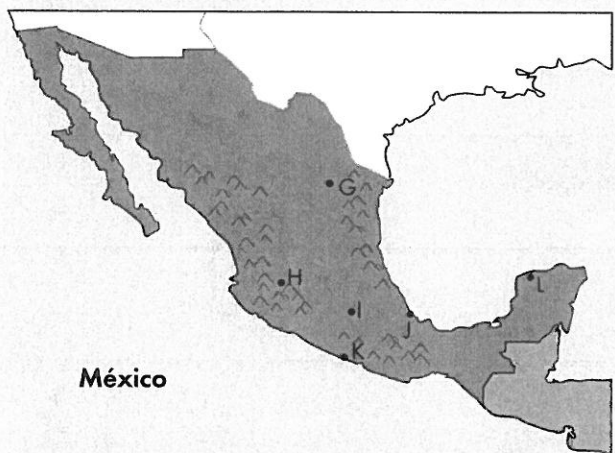
# Actividades



Write the letter of each city on the map next to its name below.



1. \_\_\_\_\_ Málaga
2. \_\_\_\_\_ Barcelona
3. \_\_\_\_\_ Bilbao
4. \_\_\_\_\_ Madrid
5. \_\_\_\_\_ Sevilla
6. \_\_\_\_\_ Granada
7. \_\_\_\_\_ Veracruz



8. \_\_\_\_\_ Acapulco
9. \_\_\_\_\_ México, D.F.
10. \_\_\_\_\_ Guadalajara
11. \_\_\_\_\_ Monterrey
12. \_\_\_\_\_ Mérida

**B**

Identify the cities described below.

1. Spain's summer playground

\_\_\_\_\_

2. second most populated city in the world

\_\_\_\_\_

3. site of the *Alhambra*

\_\_\_\_\_

4. site of the 1992 Summer Olympics

\_\_\_\_\_

5. Mexican city known for pottery and crafts

\_\_\_\_\_

6. center of Mayan culture

\_\_\_\_\_

7. Spanish city on the Guadalquivir River

\_\_\_\_\_

8. Mexican city with a first-class aquarium

\_\_\_\_\_

9. home of King Juan Carlos and Queen Sofia

\_\_\_\_\_

10. third largest city of Mexico

\_\_\_\_\_



**Study the maps of Mexico and Spain carefully. Then find the following items and write down your answer.**

1. the mountain range separating Spain from France

\_\_\_\_\_

2. the Spanish river that flows from west to east

\_\_\_\_\_

3. the country lying to the west of Spain

\_\_\_\_\_

4. the name of the ocean west of Mexico

\_\_\_\_\_

5. the name of the peninsula extending into the Gulf of Mexico

\_\_\_\_\_

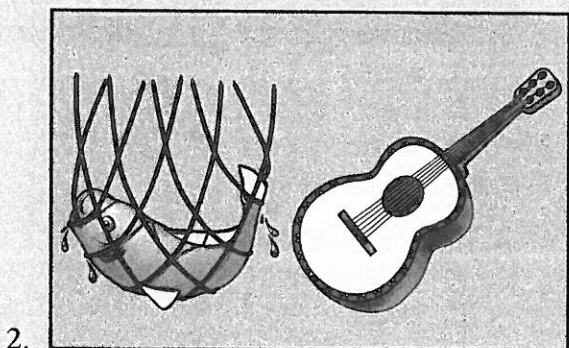



**D** Match Column A with Column B.


- A**
1. \_\_\_\_\_ Barcelona
  2. \_\_\_\_\_ Tajo
  3. \_\_\_\_\_ Sierra Madre
  4. \_\_\_\_\_ Veracruz
  5. \_\_\_\_\_ Bilbao
  6. \_\_\_\_\_ Río Bravo
  7. \_\_\_\_\_ Madrid
  8. \_\_\_\_\_ Sierra Nevada
  9. \_\_\_\_\_ México, D.F.
  10. \_\_\_\_\_ Granada

- B**
- A. mountain range of Spain
  - B. mountain range of Mexico
  - C. river in northern Mexico
  - D. river in Spain
  - E. city of African, Cuban, and Mayan heritage
  - F. city of Catalan heritage
  - G. city of Aztec heritage
  - H. city of Arab-Islamic heritage
  - I. city of Basque heritage
  - J. city of Spanish royalty

**E** Escribe al lado del dibujo el nombre de la ciudad que pertenece. (*Name the city associated with each illustration.*)



3.




\_\_\_\_\_

4.



\_\_\_\_\_

5.



\_\_\_\_\_

# F

Escoge la palabra correcta. (Choose the correct word.)

1. *Sevilla* is a \_\_\_\_\_.
  - A. river
  - B. mountain
  - C. country
  - D. city
2. *Málaga* is a port on the \_\_\_\_\_.
  - A. Mediterranean Sea
  - B. Atlantic Ocean
  - C. Pacific Ocean
  - D. Gulf of Mexico
3. Bilbao lies in the \_\_\_\_\_ of Spain.
  - A. west
  - B. east
  - C. south
  - D. north
4. The *Pirineos* are \_\_\_\_\_.
  - A. tribesmen
  - B. lakes
  - C. mountains
  - D. cities



5. Spain's most navigable river is \_\_\_\_\_.
  - A. the Guadalquivir
  - B. the Duero
  - C. the Tajo
  - D. the Guadiana
6. The Sierra Madre Mountains \_\_\_\_\_.
  - A. are high and have many ski resorts
  - B. are moderately high and have hiking trails
  - C. are low and easily accessed
  - D. are rough and difficult to drive through
7. The name of Mexico's eastern peninsula is \_\_\_\_\_.
  - A. Baja
  - B. Yucatán
  - C. Iberian
  - D. Basques
8. Mexico City is built over the ruins of \_\_\_\_\_.
  - A. an Aztec city
  - B. a Roman amphitheater
  - C. a Mayan temple
  - D. a Phoenician village
9. Cruise ships take international visitors to \_\_\_\_\_.
  - A. Mexico City
  - B. Guadalajara
  - C. Acapulco
  - D. Monterrey
10. The direction from Mexico City to Veracruz is generally \_\_\_\_\_.
  - A. south
  - B. east
  - C. west
  - D. north

# G

**Write in each blank space the answer that makes each statement geographically correct.**

Spain is situated at the southwestern tip of Europe, just a short distance from the continent of Africa. This projection of land is called the (1) \_\_\_\_\_ Peninsula. At the geographical center of the country is the capital city of (2) \_\_\_\_\_. There are (3) \_\_\_\_\_ major rivers, but only one is deep enough to permit serious transportation. This is the (4) \_\_\_\_\_ River. About two-thirds of Spain's coast is bordered by the (5) \_\_\_\_\_ Sea. The northern port city of (6) \_\_\_\_\_ serves ferries to the United Kingdom and exports goods all over the world. The landscape is varied, with the rugged Pyrenees Mountains to the (7) \_\_\_\_\_, a high plateau in the center, and more mountains in the southeast near Granada. This chain is called the (8) \_\_\_\_\_. The big nation lying directly north of Spain is France, while the tiny principality of (9) \_\_\_\_\_ is tucked into Spain's northern border. The narrow bit of (10) \_\_\_\_\_ called the Strait of Gibraltar separates Spain from the country of Morocco.



Imagine that you are a tour guide hired to lead a group of scholars from the United States on a cultural and historical tour of Mexico. Name three cities you would show them and tell what they would see on the tour.

---

---

---

---

---

---

---

---

---

---

---

---



Name three places you would like to visit if you were the winner of a three-week vacation in Spain. (You get to choose the season.) Tell why you selected these places. What would you see or do there?

---

---

---

---

---

---

---

---

---

---

---

---



**J** Maze. Andrés and Ana are ready to travel. Trace their vacation route to find out where they will be spending the summer. Name their destination in the space provided.

Places they'll visit:

---

---

---

---

---

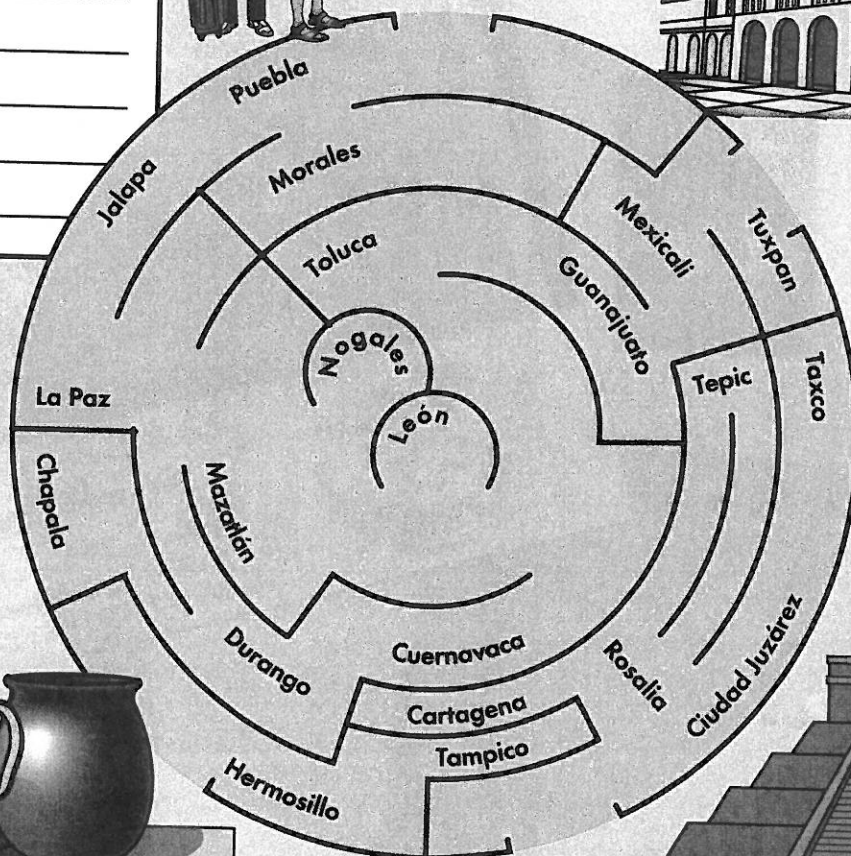
---

---

---




México, D.F.

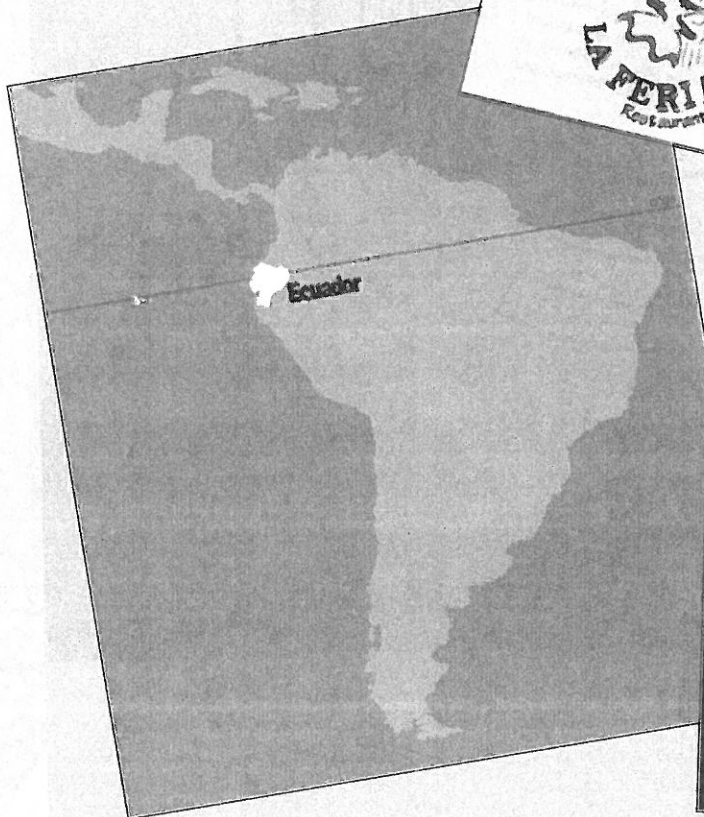


Their destination is:

---



# ¡Lengua viva!





**K**

Look at the La Feria clipping and then answer the following questions.

1. In what country can you see performances of traditional folk dancing?

---

2. In which city?

---

3. In what part of the city?

---

4. What is the name of the show?

---

5. What is the Spanish word for *festival*?

---

**L**

Look at the clippings and then answer the following questions.

1. What does the horizontal line on the map of Ecuador represent?

---

2. On which continent do you find the country of Ecuador?

---

3. What does the word España mean in English?

---

4. What are the colors of this country's flag?

---


5. In what country can you skin dive, see tropical plants, and learn about Mayan culture?

---

## Proverbio

“ Si a Roma fueres,  
haz como vieres.



When in Rome, do  
as the Romans do. ”



# Symtalk




**M**

Escribe en el espacio la palabra correcta en español (*In the space, write the correct word in Spanish.*)




 1. _____	 2. _____	 3. _____	 4. _____	 5. _____
---	---	---	---	---

**N**

Di las frases, luego escríbelas en español. (*Say the sentences, then write them in Spanish.*)

1.   

---

2.   

---

3.  y   






---

4.  y   


---



**0** Con un(a) compañero/a, haz la pregunta o contéstala. Luego, escribe el diálogo. (With a partner, ask the question or give the answer. Then, write the dialogue.)



# Crucigrama



## Horizontales

- 5. peninsula of Portugal and Spain
- 7. southern Spanish resort city
- 10. second largest city of Mexico
- 12. Spanish name for Spain
- 13. site of the bell tower *La Giralda*

## Verticales

- 1. peninsula where Cancún is situated
- 2. city built on the Mayan ruins
- 3. mountain chain of Mexico
- 4. site of a *modernista* church
- 6. river of northern Spain
- 8. port city on the Gulf of Mexico
- 9. home of the *Alhambra*
- 11. \_\_\_\_\_ *Pirineos* (The Pyrenees Mountains)